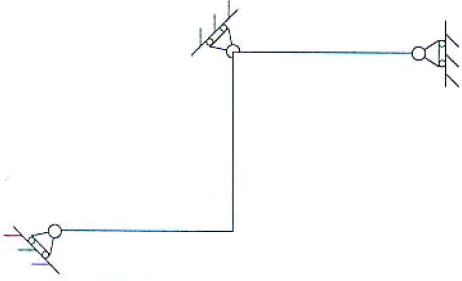


ESERCIZI DI ANALISI CINEMATICA

Eeguire l'analisi cinematica delle seguenti strutture. Motivare brevemente la risposta.

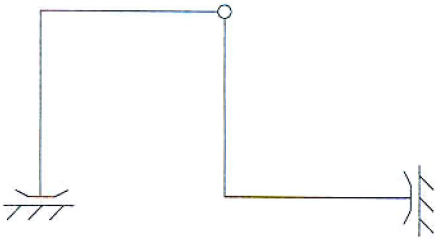
GDL = _____ ipostatica isostatica

GDV = _____ iperstatica labile



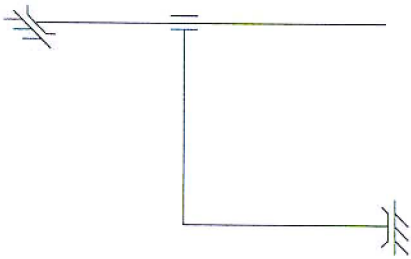
GDL = _____ ipostatica isostatica

GDV = _____ iperstatica labile



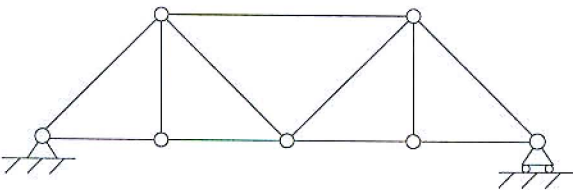
GDL = _____ ipostatica isostatica

GDV = _____ iperstatica labile



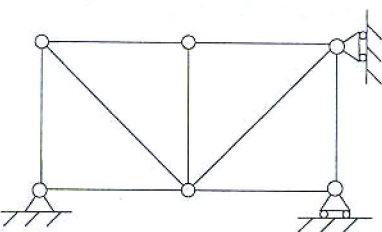
GDL = _____ ipostatica isostatica

GDV = _____ iperstatica labile



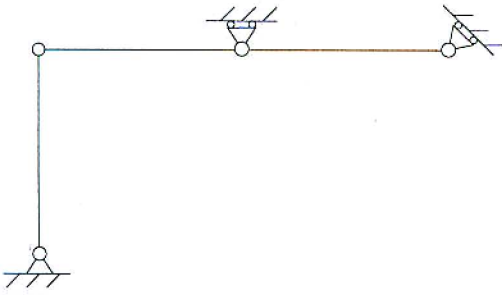
GDL = _____ ipostatica isostatica

GDV = _____ iperstatica labile



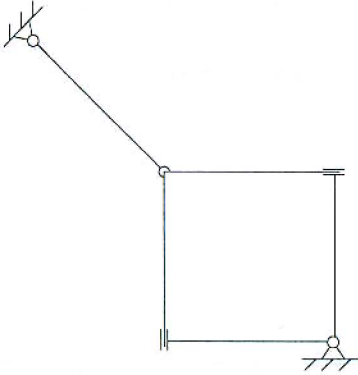
GDL = _____ ipostatica isostatica

GDV = _____ iperstatica labile



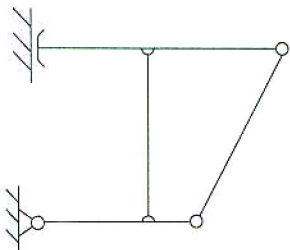
GDL = _____ ipostatica isostatica

GDV = _____ iperstatica labile



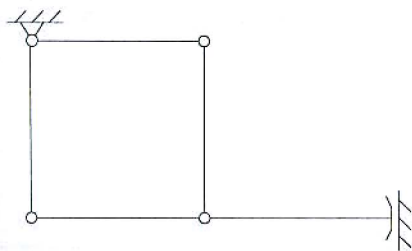
GDL = _____ ipostatica isostatica

GDV = _____ iperstatica labile



GDL = _____ ipostatica isostatica

GDV = _____ iperstatica labile



GDL = _____ ipostatica isostatica

GDV = _____ iperstatica labile

